

© International Baccalaureate Organization 2024

All rights reserved. No part of this product may be reproduced in any form or by any electronic or mechanical means, including information storage and retrieval systems, without the prior written permission from the IB. Additionally, the license tied with this product prohibits use of any selected files or extracts from this product. Use by third parties, including but not limited to publishers, private teachers, tutoring or study services, preparatory schools, vendors operating curriculum mapping services or teacher resource digital platforms and app developers, whether fee-covered or not, is prohibited and is a criminal offense.

More information on how to request written permission in the form of a license can be obtained from <https://ibo.org/become-an-ib-school/ib-publishing/licensing/applying-for-a-license/>.

© Organisation du Baccalauréat International 2024

Tous droits réservés. Aucune partie de ce produit ne peut être reproduite sous quelque forme ni par quelque moyen que ce soit, électronique ou mécanique, y compris des systèmes de stockage et de récupération d'informations, sans l'autorisation écrite préalable de l'IB. De plus, la licence associée à ce produit interdit toute utilisation de tout fichier ou extrait sélectionné dans ce produit. L'utilisation par des tiers, y compris, sans toutefois s'y limiter, des éditeurs, des professeurs particuliers, des services de tutorat ou d'aide aux études, des établissements de préparation à l'enseignement supérieur, des fournisseurs de services de planification des programmes d'études, des gestionnaires de plateformes pédagogiques en ligne, et des développeurs d'applications, moyennant paiement ou non, est interdite et constitue une infraction pénale.

Pour plus d'informations sur la procédure à suivre pour obtenir une autorisation écrite sous la forme d'une licence, rendez-vous à l'adresse <https://ibo.org/become-an-ib-school/ib-publishing/licensing/applying-for-a-license/>.

© Organización del Bachillerato Internacional, 2024

Todos los derechos reservados. No se podrá reproducir ninguna parte de este producto de ninguna forma ni por ningún medio electrónico o mecánico, incluidos los sistemas de almacenamiento y recuperación de información, sin la previa autorización por escrito del IB. Además, la licencia vinculada a este producto prohíbe el uso de todo archivo o fragmento seleccionado de este producto. El uso por parte de terceros —lo que incluye, a título enunciativo, editoriales, profesores particulares, servicios de apoyo académico o ayuda para el estudio, colegios preparatorios, desarrolladores de aplicaciones y entidades que presten servicios de planificación curricular u ofrezcan recursos para docentes mediante plataformas digitales—, ya sea incluido en tasas o no, está prohibido y constituye un delito.

En este enlace encontrará más información sobre cómo solicitar una autorización por escrito en forma de licencia: <https://ibo.org/become-an-ib-school/ib-publishing/licensing/applying-for-a-license/>.

Chemistry

Higher level

Paper 1

8 May 2024

Zone A afternoon | Zone B afternoon | Zone C afternoon

1 hour

Instructions to candidates

- Do not open this examination paper until instructed to do so.
- Answer all the questions.
- For each question, choose the answer you consider to be the best and indicate your choice on the answer sheet provided.
- The periodic table is provided for reference on page 2 of this examination paper.
- The maximum mark for this examination paper is **[40 marks]**.

The Periodic Table

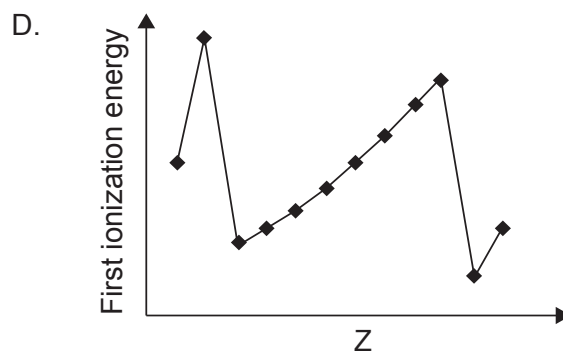
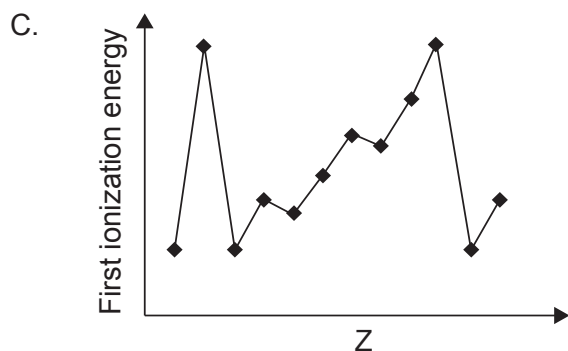
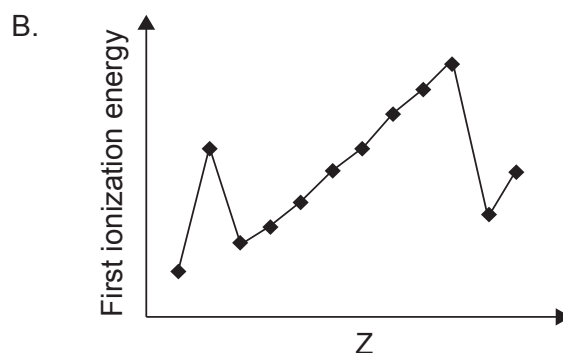
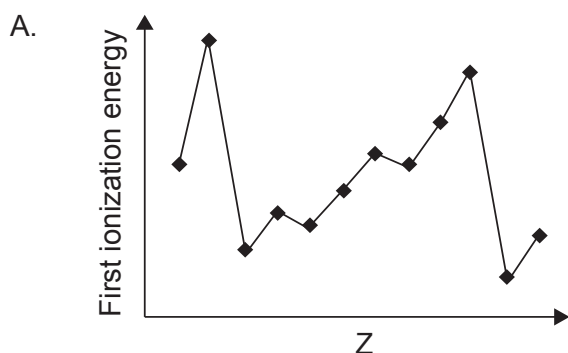
	1	2	3	4	5	6	7	8	9	10	11	12	13	14	15	16	17	18	
1	1 H 1.01																	2 He 4.00	
2	3 Li 6.94	4 Be 9.01	Atomic number Element Relative atomic mass																
3	11 Na 22.99	12 Mg 24.31																17 Cl 35.45	18 Ar 39.95
4	19 K 39.10	20 Ca 40.08	21 Sc 44.96	22 Ti 47.87	23 V 50.94	24 Cr 52.00	25 Mn 54.94	26 Fe 55.85	27 Co 58.93	28 Ni 58.69	29 Cu 63.55	30 Zn 65.38	31 Ga 69.72	32 Ge 72.63	33 As 74.92	34 Se 78.96	35 Br 79.90	36 Kr 83.90	
5	37 Rb 85.47	38 Sr 87.62	39 Y 88.91	40 Zr 91.22	41 Nb 92.91	42 Mo 95.96	43 Tc (98)	44 Ru 101.07	45 Rh 102.91	46 Pd 106.42	47 Ag 107.87	48 Cd 112.41	49 In 114.82	50 Sn 118.71	51 Sb 121.76	52 Te 127.60	53 I 126.90	54 Xe 131.29	
6	55 Cs 132.91	56 Ba 137.33	57 † La 138.91	72 Hf 178.49	73 Ta 180.95	74 W 183.84	75 Re 186.21	76 Os 190.23	77 Ir 192.22	78 Pt 195.08	79 Au 196.97	80 Hg 200.59	81 Tl 204.38	82 Pb 207.2	83 Bi 208.98	84 Po (209)	85 At (210)	86 Rn (222)	
7	87 Fr (223)	88 Ra (226)	89 ‡ Ac (227)	104 Rf (267)	105 Db (268)	106 Sg (269)	107 Bh (270)	108 Hs (269)	109 Mt (278)	110 Ds (281)	111 Rg (281)	112 Cn (285)	113 Uut (286)	114 Uug (289)	115 Uup (288)	116 Uuh (293)	117 Uus (294)	118 Uuo (294)	
			†	58 Ce 140.12	59 Pr 140.91	60 Nd 144.24	61 Pm (145)	62 Sm 150.36	63 Eu 151.96	64 Gd 157.25	65 Tb 158.93	66 Dy 162.50	67 Ho 164.93	68 Er 167.26	69 Tm 168.93	70 Yb 173.05	71 Lu 174.97		
			‡	90 Th 232.04	91 Pa 231.04	92 U 238.03	93 Np (237)	94 Pu (244)	95 Am (243)	96 Cm (247)	97 Bk (247)	98 Cf (251)	99 Es (252)	100 Fm (257)	101 Md (258)	102 No (259)	103 Lr (262)		

1. Which of the following are homogeneous mixtures?
- An aqueous solution of sodium chloride
 - A mixture of pentane and hexane
 - A mixture of ethanol and water
- A. I and II only
B. I and III only
C. II and III only
D. I, II and III
2. Which compound has the highest percentage of carbon by mass?
- A. CH_4
B. C_2H_6
C. CO
D. CO_2
3. 6.00 mol of copper, Cu, are mixed with 12.00 mol of dilute nitric acid, $\text{HNO}_3(\text{aq})$. The equation for the reaction that occurs is shown below.
- $$3\text{Cu}(\text{s}) + 8\text{HNO}_3(\text{aq}) \rightarrow 3\text{Cu}(\text{NO}_3)_2(\text{aq}) + 2\text{NO}(\text{g}) + 4\text{H}_2\text{O}(\text{l})$$
- What is the amount, in mol, of nitrogen(II) oxide, NO, produced assuming that the reaction goes to completion?
- A. 3.00
B. 4.00
C. 8.00
D. 18.00
4. What is the maximum number of electrons that can occupy the fourth shell in the atom ($n = 4$)?
- A. 8
B. 18
C. 32
D. 36

5. How are the lines in the emission spectrum of hydrogen produced?

- A. Electrons move to higher energy levels absorbing photons.
- B. Electrons move to lower energy levels releasing photons.
- C. Electrons move to higher energy levels releasing photons.
- D. Electrons move to lower energy levels absorbing photons.

6. Which graph shows the correct trend in the first ionization energies of the first twelve elements in the periodic table?

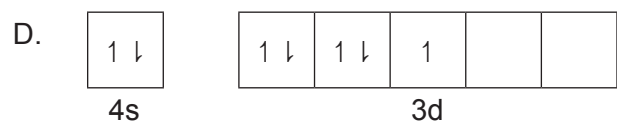
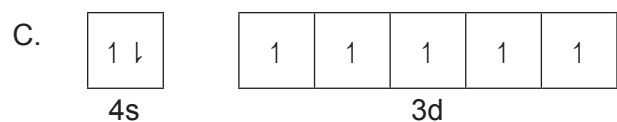
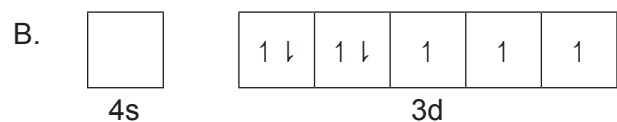
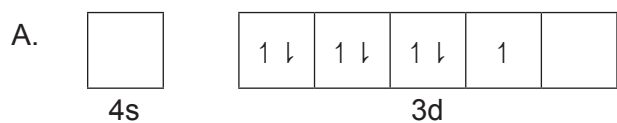


7. Which set of ions shows **increasing** ionic radii?

- A. $\text{P}^{3-} < \text{Cl}^- < \text{K}^+ < \text{Ca}^{2+}$
- B. $\text{Cl}^- < \text{P}^{3-} < \text{Ca}^{2+} < \text{K}^+$
- C. $\text{K}^+ < \text{Ca}^{2+} < \text{P}^{3-} < \text{Cl}^-$
- D. $\text{Ca}^{2+} < \text{K}^+ < \text{Cl}^- < \text{P}^{3-}$

8. When the same amount of each oxide is added to an equal volume of water, which oxide produces the solution with the highest pH?
- A. MgO
 - B. Al₂O₃
 - C. SiO₂
 - D. SO₂

9. In which diagram are the 4s and 3d orbitals of the Co²⁺ ion correctly filled with electrons?



10. In which species is the oxidation state of chromium different?

- A. [Cr(H₂O)₄Cl₂]⁺
- B. [Cr(H₂O)₃(OH)₃]
- C. [Cr(NH₃)₆]³⁺
- D. CrO₃

11. What is the geometry around a carbon atom in graphene?

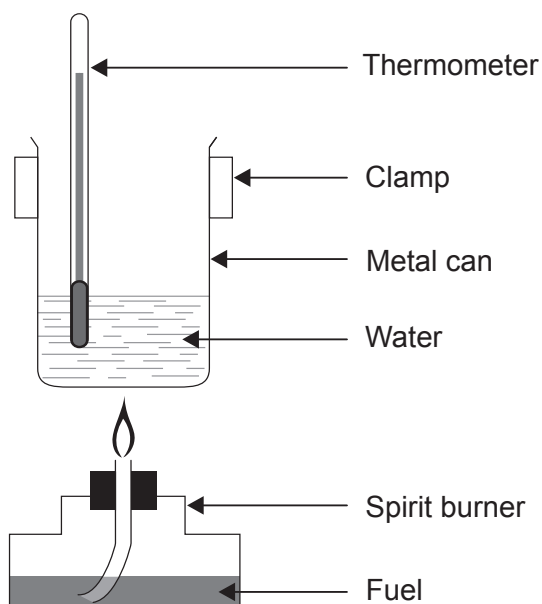
- A. Hexagonal
- B. Pyramidal
- C. Tetrahedral
- D. Trigonal planar

12. What is the correct number of bonding pairs of electrons in ethanedioic acid, $(\text{COOH})_2$?
- A. 7
B. 8
C. 9
D. 18
13. Which best explains the malleability of metals?
- A. Delocalized electrons can move throughout the anion lattice.
B. Layers of anions are held together by delocalized electrons.
C. Non-directional bonds allow layers of cations to slide over each other.
D. The attraction between the cations and the delocalized electrons is strong.
14. What are the numbers of sigma and pi bonds in propanenitrile, $\text{CH}_3\text{CH}_2\text{CN}$?

	Sigma	Pi
A.	6	2
B.	7	3
C.	8	2
D.	9	1

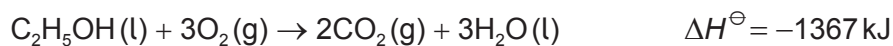
15. Which molecule is non-polar?
- A. XeF_2
B. IF_5
C. SF_2
D. PF_3

16. A student determined the enthalpy change of combustion of a fuel by burning it in a spirit burner placed under a metal can containing 100 cm³ of water.

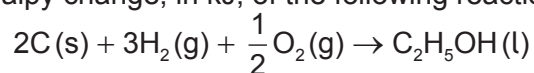


Which modification can improve the accuracy of the experiment?

- A. Placing a lid on the metal can containing water
 - B. Covering the spirit burner with aluminium foil
 - C. Increasing the distance between the metal can and the spirit burner
 - D. Using warm water instead of water at room temperature in the metal can
17. Standard enthalpy changes of reaction are provided for the following reactions.



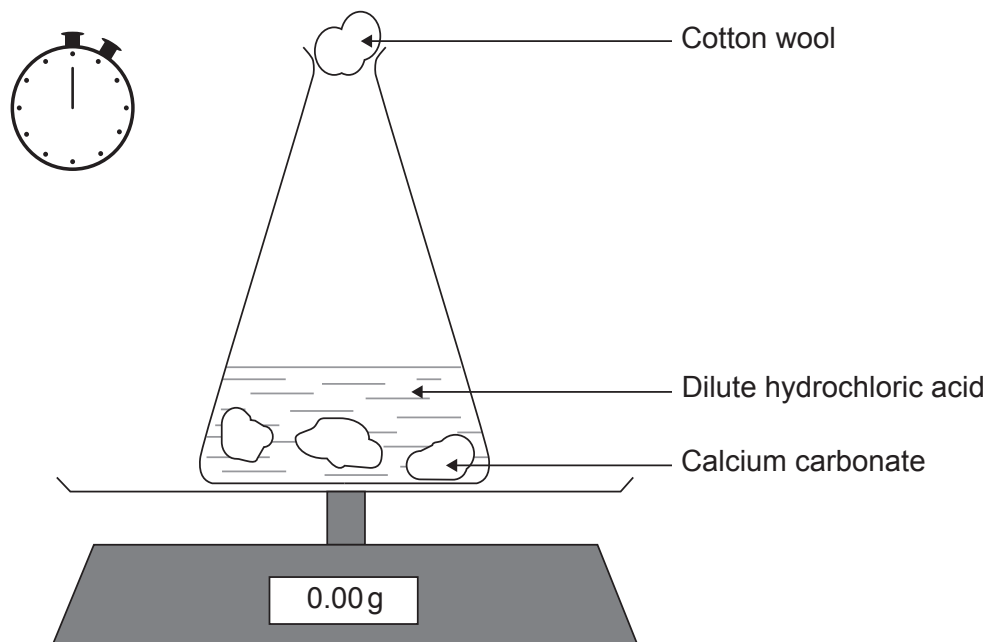
What is the standard enthalpy change, in kJ, of the following reaction?



- A. $(-394 \times 2) - (286 \times 3) - 1367$
- B. $(394 \times 2) + (286 \times 3) + 1367$
- C. $(394 \times 2) + (286 \times 3) - 1367$
- D. $(-394 \times 2) - (286 \times 3) + 1367$

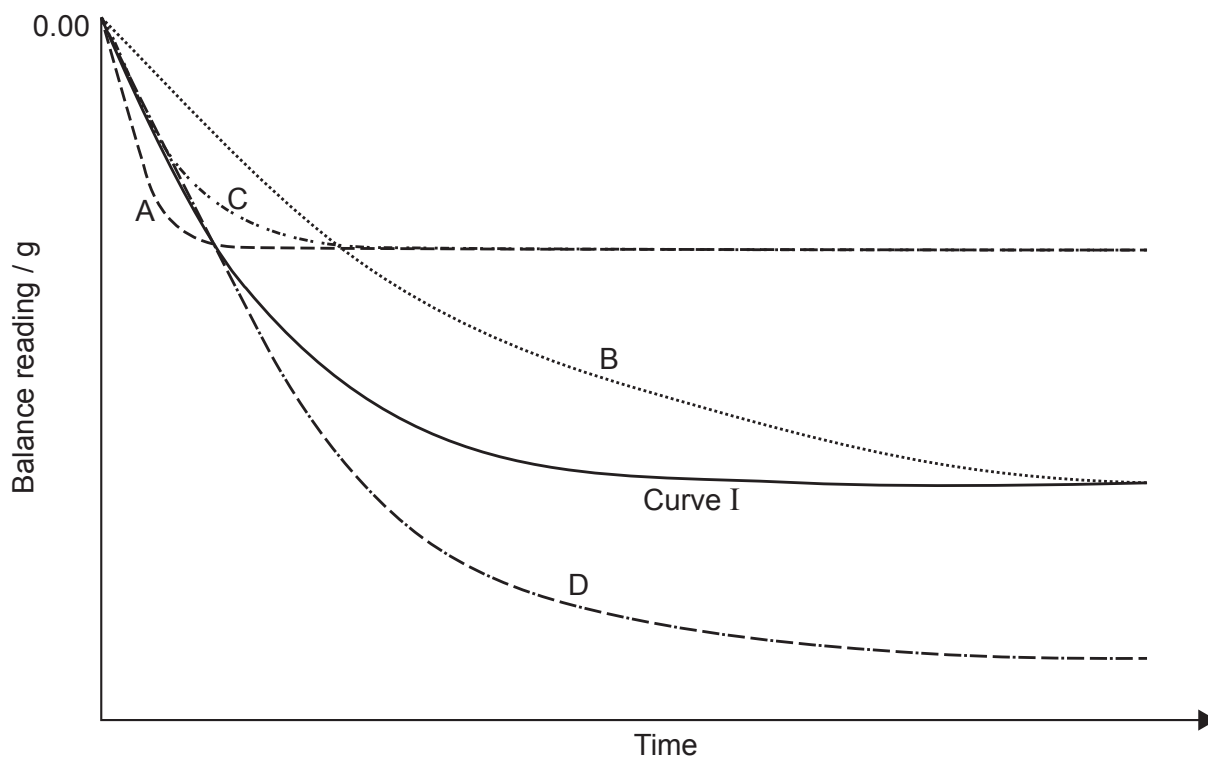
18. Which compound has the smallest lattice enthalpy?
- A. RbBr
 - B. SrO
 - C. MgBr₂
 - D. Na₂O
19. Which equation represents the enthalpy of hydration of bromide ions?
- A. $\text{Br}_2(\text{g}) \rightarrow 2\text{Br}^-(\text{aq})$
 - B. $\text{Br}_2(\text{l}) \rightarrow 2\text{Br}^-(\text{aq})$
 - C. $\text{Br}^-(\text{g}) \rightarrow \text{Br}^-(\text{aq})$
 - D. $\text{Br}^-(\text{s}) \rightarrow \text{Br}^-(\text{aq})$
20. Which best explains the low rate of a reaction between two gases occurring at high temperature and high pressure?
- A. The frequency of collisions is low.
 - B. The bonds in the reactants are strong.
 - C. A high fraction of reactant molecules collides with the correct orientation.
 - D. The activation energy of the reaction is low.

21. The mass of a flask containing excess calcium carbonate, $\text{CaCO}_3(\text{s})$, reacting with 100 cm^3 of 0.50 mol dm^{-3} hydrochloric acid, $\text{HCl}(\text{aq})$, was monitored with time at 25°C .

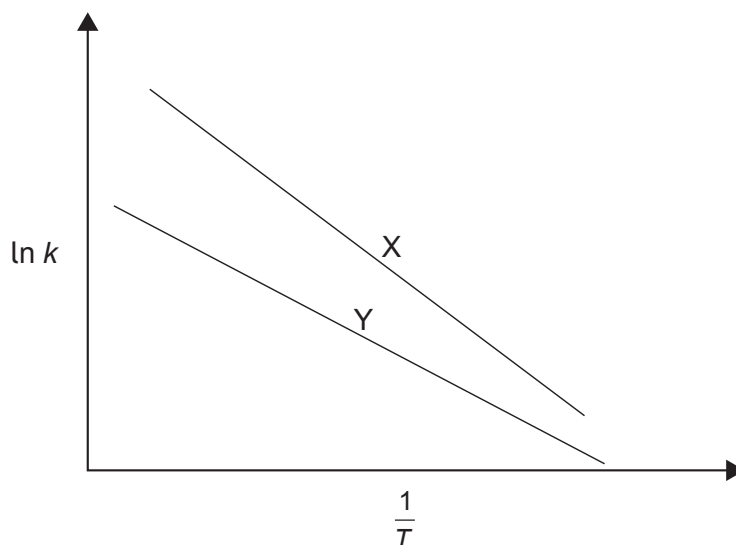


Curve I was obtained under these conditions.

Which curve corresponds to the experiment when it was repeated at the same temperature using the same mass of same sized pieces of calcium carbonate and 50 cm^3 of 0.50 mol dm^{-3} hydrochloric acid?



22. The graphs below show a plot of $\ln k$ against $\frac{1}{T}$ for reactions X and Y.



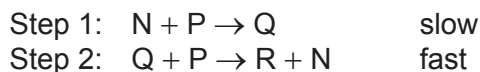
Considering the Arrhenius equation

$$\ln k = \ln A - \frac{E_a}{RT}$$

which combination is correct for reactions X and Y?

	Value of E_a	Value of A
A.	$X > Y$	$X > Y$
B.	$X > Y$	$Y > X$
C.	$Y > X$	$X > Y$
D.	$Y > X$	$Y > X$

23. A reaction proceeds by the following mechanism.

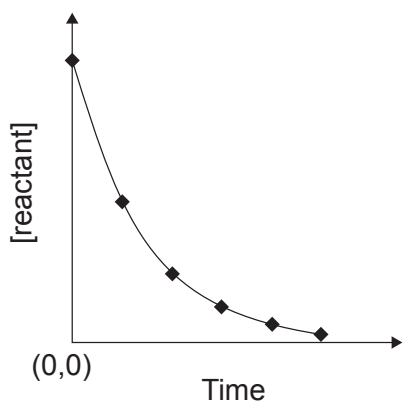


Which statement is correct about the reaction?

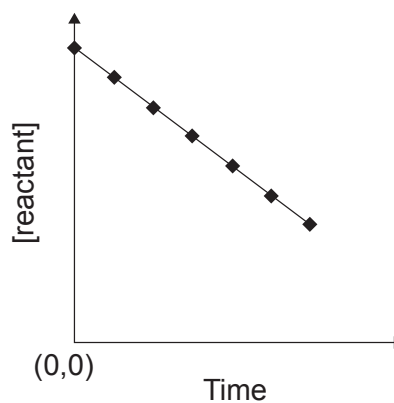
- A. The overall equation for the reaction is $2\text{P} \rightarrow \text{R} + \text{Q}$.
- B. Q is an intermediate.
- C. The overall order of the reaction is three.
- D. The rate constant has the units s^{-1} .

24. Which graph is correct for a first order reaction?

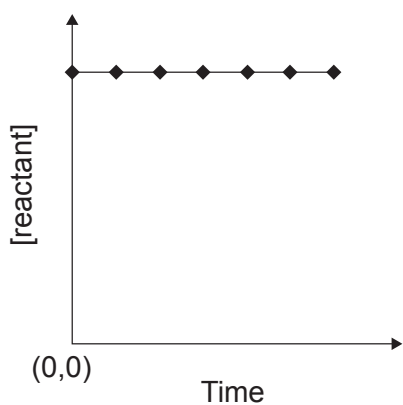
A.



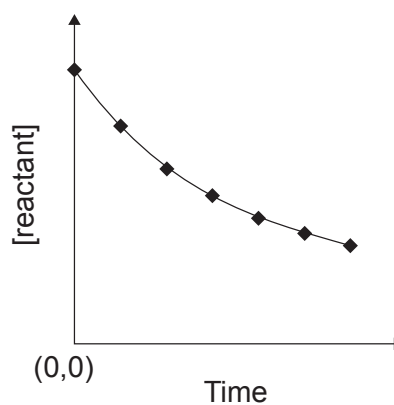
B.



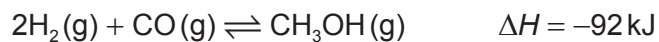
C.



D.



25. Which pair of changes will both shift the position of equilibrium to the left?



	Temperature	Pressure
A.	increase	increase
B.	decrease	decrease
C.	increase	decrease
D.	decrease	increase

26. 1.2 mol of X are mixed with 0.6 mol of Y and allowed to reach equilibrium in a 1.0 dm³ container at a certain temperature.



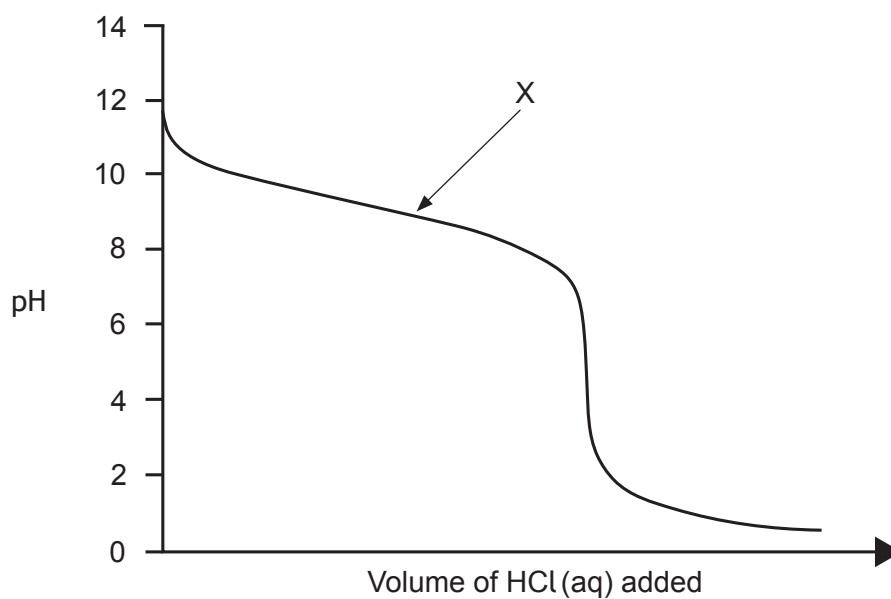
There was 1.0 mol of Z present in the container at equilibrium.

What is the value of K_c at this temperature?

- A. 0.004
 B. 0.02
 C. 50
 D. 250
27. What is the ratio of $[H^+]$ in ethanoic acid with a pH = 3 to $[H^+]$ in water at 298 K?
 A. 3:7
 B. 7:3
 C. 1:10⁴
 D. 10⁴:1
28. What is the conjugate base of OH⁻?
 A. O²⁻
 B. H₂O
 C. H₃O⁺
 D. H⁻
29. Which combination is correct for a very weak acid and its conjugate base?

	pK_a of acid	K_b of conjugate base
A.	low	low
B.	low	high
C.	high	low
D.	high	high

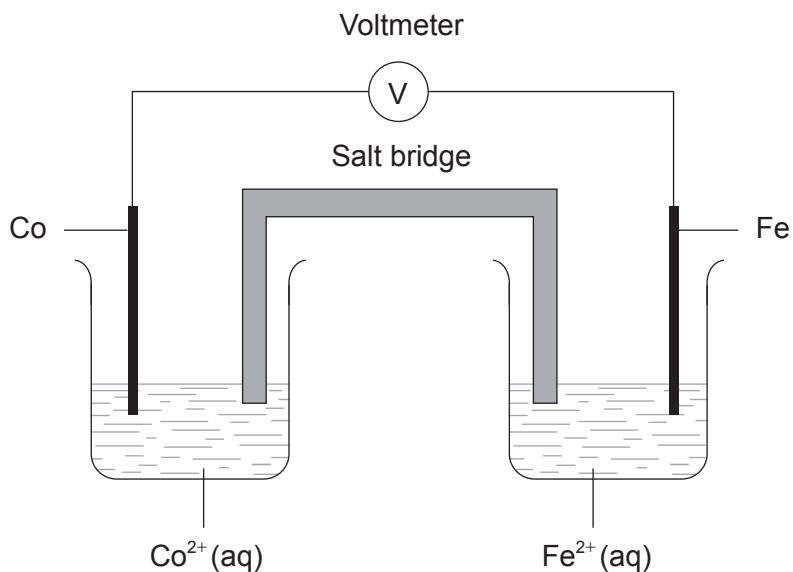
30. The pH curve below is produced when aqueous ammonia is titrated with hydrochloric acid.



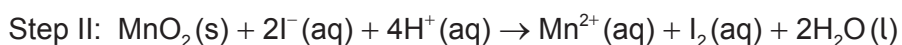
Besides water, which species are the major components of the reaction mixture at point X of the pH curve?

- A. NH_3 only
- B. H^+ only
- C. NH_3 and NH_4^+
- D. H^+ and NH_4^+

31. Iron is a more reactive metal than cobalt. Which statement is correct about the voltaic cell below?



- A. Electrons flow from cobalt to iron in the wire.
- B. Negative ions flow through the salt bridge to the iron half-cell.
- C. The mass of the cobalt electrode decreases.
- D. Reduction occurs at the iron electrode.
32. Which of the following occurs during the Winkler test used to determine the concentration of dissolved oxygen in water?



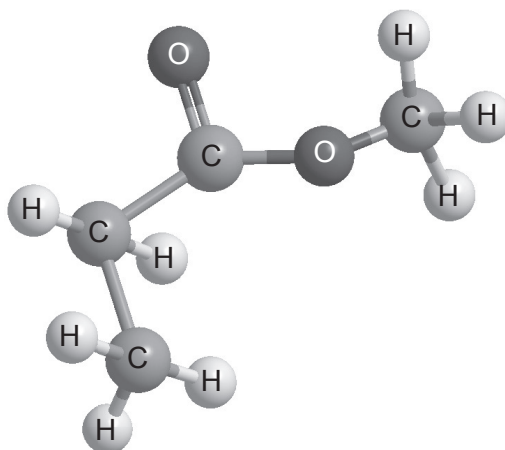
- A. Manganese(II) species is oxidized.
- B. Iodine is reduced by oxygen to iodide ions.
- C. Oxygen is oxidized.
- D. Thiosulfate ions are reduced.

33. The same current flows for the same length of time through two different electrolytic cells, one containing molten sodium chloride and the other molten magnesium chloride. Which statement is correct?
- A. The masses of sodium and magnesium metals produced are equal.
 - B. The amounts, in mol, of sodium and magnesium metals produced are equal.
 - C. The mass of sodium produced is larger than the mass of magnesium produced.
 - D. The amount, in mol, of magnesium produced is larger than the amount of sodium produced.

34. Which combination is correct for a spontaneous reaction?

	E^\ominus	ΔG^\ominus
A.	positive	positive
B.	positive	negative
C.	negative	positive
D.	negative	negative

35. What is the IUPAC name of this compound?



- A. Methyl ethanoate
- B. Ethyl methanoate
- C. Methyl propanoate
- D. Propyl methanoate

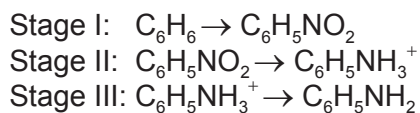
36. What is the major product formed when Cl_2 is added to propene?

- A. 2,2-dichloropropane
- B. 1,2-dichloropropane
- C. 1-chloroprop-2-ene
- D. 2-chloropropane

37. Which combination labels the isomers correctly?

A.	<i>Z</i>	<i>Z</i>
B.	<i>Z</i>	<i>E</i>
C.	<i>E</i>	<i>E</i>
D.	<i>E</i>	<i>Z</i>

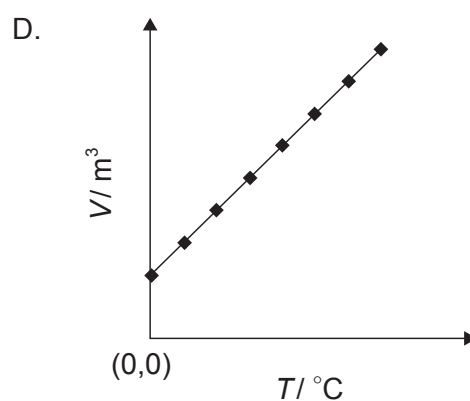
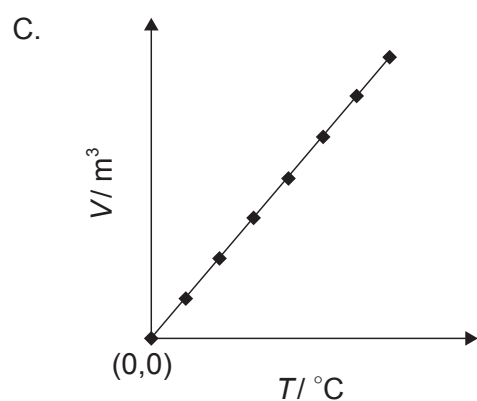
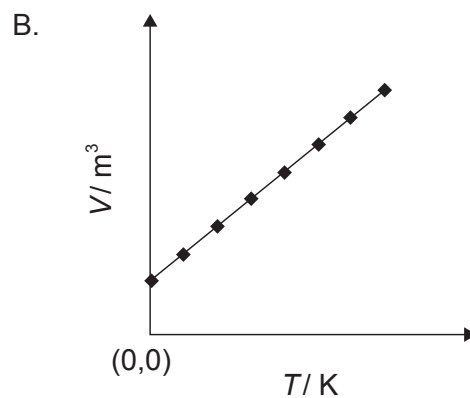
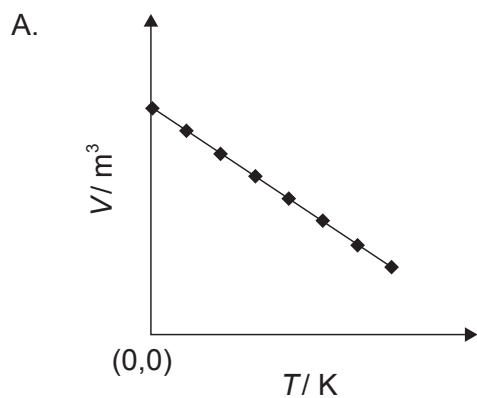
38. Benzene, C_6H_6 , can be converted to phenylamine, $\text{C}_6\text{H}_5\text{NH}_2$, in a three-stage process. The organic compounds involved in each stage are shown below.



What are the correct reagents for stages I–III?

	Stage I	Stage II	Stage III
A.	H_2SO_4 and HNO_3	HCl and Sn	NaOH
B.	H_2SO_4 and HNO_3	NH_3	NaOH
C.	HNO_2	HCl and Sn	NaOH
D.	HNO_2	NH_3	HCl

39. Which graph shows the correct relationship between the volume and temperature of an ideal gas at constant pressure?



40. What are the number of signals and the splitting of these signals in the ^1H NMR spectrum of propanone?

	Number of signals	Splitting of signals
A.	1	singlet
B.	1	quartet
C.	2	triplet
D.	2	quartet